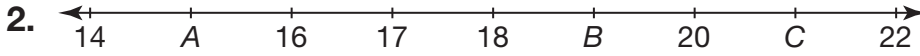
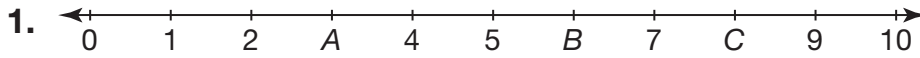


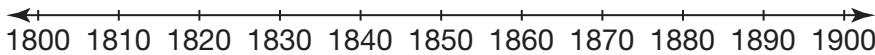
Name _____

Understanding Number Lines

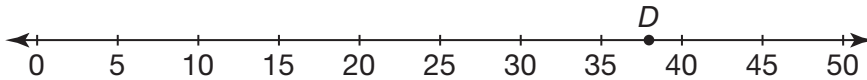
Write the value of A , B , and C on each number line.



4. Texas became a state in 1845. Draw a point to show where 1845 is on the number line.



5. **Critique Reasoning** Lara said that point D has a value of 38. Is her statement reasonable? Explain your answer.



6. Which letter represents 57 on this number line?



A E

B F

C G

D H