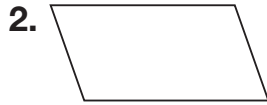


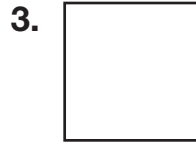
Name _____

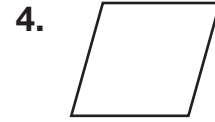
Quadrilaterals

Write as many names as possible for each quadrilateral.









In 5–8, write the name that best describes the quadrilateral.

5. A parallelogram with four equal sides, but no right angles

6. A rectangle with four right angles and all sides the same length

7. A quadrilateral that has exactly one pair of parallel sides

8. A parallelogram with four right angles

9. Can a rectangle also be a rhombus? Explain.

10. Which is the correct name for this shape?

- A Rhombus
- B Trapezoid
- C Parallelogram
- D Rectangle

