


Name _____

Time to the Half Hour and Quarter Hour

Write the time shown on each clock in two ways.

1.



2.



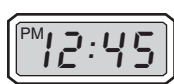
3.




4.



5.



6.



7. The school bus stops at Randy's stop at 8:15 A.M. Randy arrived at the bus stop at quarter after 8. Did he miss the bus? Explain.

8. Which does **NOT** describe the time shown on the clock?

- A five forty-five
- B five fifteen
- C quarter after five
- D fifteen minutes after five

