


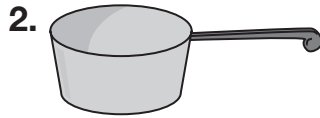
Name _____

Customary Units of Capacity


Choose the better estimate for each.




1 c or 1 gal



3 qt or 3 gal



1 pt or 1 gal



10 qt or 10 gal

5. coffee pot
1 c or 1 gal

6. bowl of soup
1 pt or 1 gal

7. tea kettle
1 qt or 1 gal

8. small milk carton
1 c or 1 gal

Choose the better unit to measure the capacity of each.

9. hot tub
qt or gal

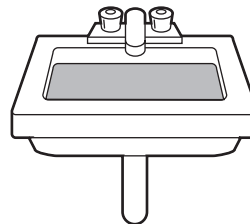
10. shampoo bottle
pt or gal

11. bucket
c or gal

12. sports cooler
qt or gal

13. **Reasonableness** John has 4 cups filled with fruit juice. He said that he has a gallon of fruit juice. Is his statement reasonable? Explain why or why not.

14. **Reason** Which measurement best describes the capacity of a kitchen sink?



A 5 quarts

B 5 pints

C 5 cups

D 5 gallons