

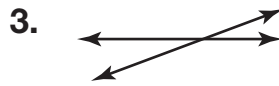
Name _____


Lines and Line Segments

Write the name for each.









Draw a picture of each.

5. Parallel lines

6. Line segment

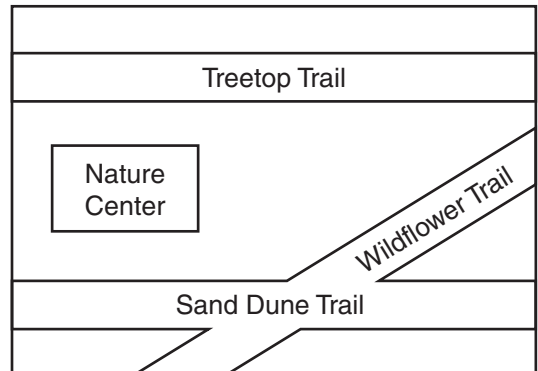
7. Intersecting lines

8. Line

For 9 and 10, use the map at the right. Tell if the trails named look like intersecting lines or parallel lines.

9. Treetop Trail and Sand Dune

10. Sand Dune Trail and Wildflower



11. What is the difference between a line and a line segment?

12. How many times does a pair of intersecting lines cross?

A Never

B 1 time

C 2 times

D 3 times