

Name _____


Perimeter of Common Shapes

Use an inch ruler to measure the length of the sides of each polygon. Find the perimeter.

1.

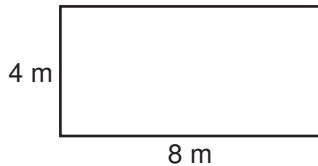


2.

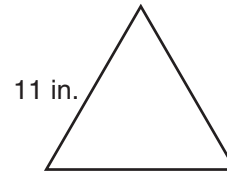


Find the perimeter of each shape.

3.



4.



5. The largest room in Lauren's house is shaped like a square with sides of 6 yards. What is the perimeter of that room?

6. The basketball court at Johnson Elementary School is in the shape of a rectangle. It is 92 feet long and 46 feet wide. What is the perimeter of the basketball court?

7. A square has 9-inch sides. Every side of a pentagon is also 9 inches long. Are their perimeters the same? Explain your answer.

8. What is the perimeter of a hexagon that has equal sides of 12 inches?

- A** 60 inches **B** 66 inches **C** 72 inches **D** 84 inches