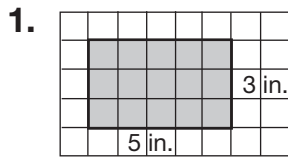
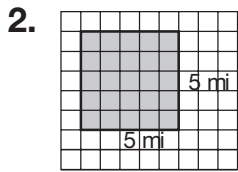


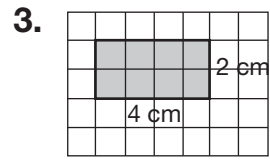
Name _____

Standard Units

For **1** through **3**, count the square units. Then write the area.

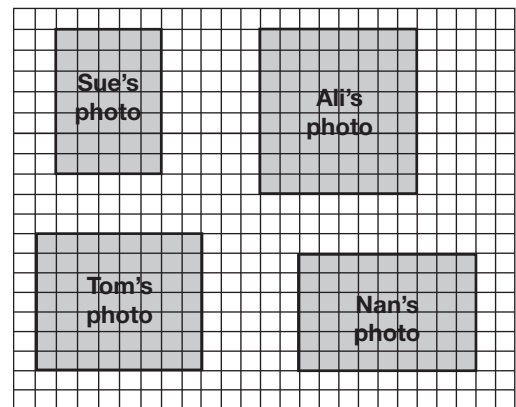






Use the diagram of the bulletin board for **4** through **6**.

4. What is the area of each student's photo?



□ = 1 square inch

5. What is the area of Sue's photo and Tom's photo?

- A** 80 square inches
- B** 81 square inches
- C** 90 square inches
- D** 91 square inches

6. Colleen's photo is 9 inches long and 7 inches wide. Is it larger or smaller than Ali's photo? Explain how you know.

