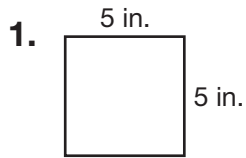
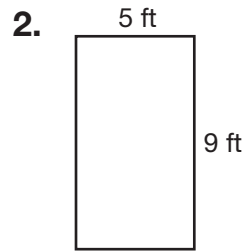
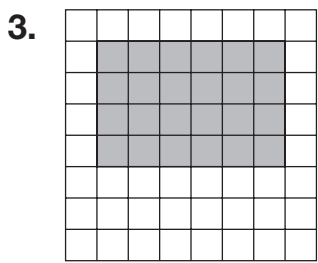


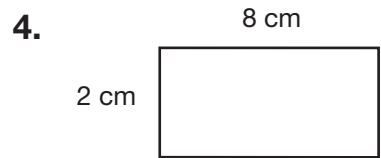
Area of Squares and Rectangles

Find the area of each figure.



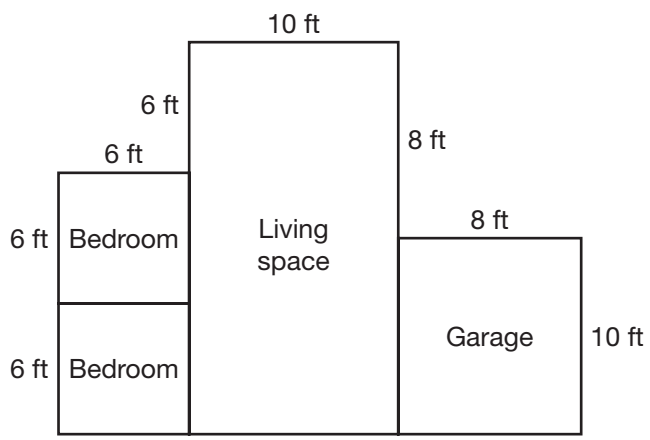






5. What is the area of one bedroom?

6. What is the area of the garage?



7. Which is the area of a rectangle with a length of 6 cm and a width of 9 cm?

- A** 63 square cm **B** 54 square cm **C** 45 square cm **D** 36 square cm

8. **Writing to Explain** Explain how you would find the length of one side of a square if the area is 16 square units.
