


Name \_\_\_\_\_

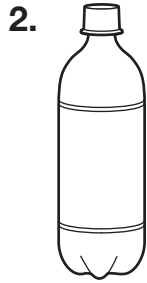
# Metric Units of Capacity

Choose the better estimate for each.



2 mL or 2 L

\_\_\_\_\_



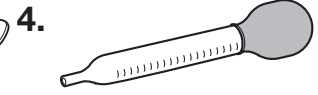
2 mL or 2 L

\_\_\_\_\_



5 mL or 5 L

\_\_\_\_\_



1 mL or 1 L

\_\_\_\_\_

5. kitchen sink  
2 L or 20 L

\_\_\_\_\_

6. coffee cup  
250 mL or 25 L

\_\_\_\_\_

7. thermos  
2 L or 20 L

\_\_\_\_\_

8. pitcher  
40 mL or 4 L

\_\_\_\_\_

Choose the better unit to measure the capacity of each.

9. tea cup  
mL or L

\_\_\_\_\_

10. bath tub  
mL or L

\_\_\_\_\_

11. glass of juice  
mL or L

\_\_\_\_\_

12. washing machine  
mL or L

\_\_\_\_\_

13. **Reason** A liter is equal to 100 centiliters. Is a centiliter a greater measure than a milliliter? Explain.

\_\_\_\_\_  
\_\_\_\_\_  
\_\_\_\_\_

14. **Reason** Which is the best estimate for the capacity of a large bottle of water?

A 1 L

C 4 L

B 400 mL

D 40 mL

