

Name _____

Units of Mass

Choose the better estimate for each.

1.



3 g or 3 kg

2.




40 g or 40 kg

3.



250 g or 25 kg

4.



30 g or 300 g

5. crayon

20 g or 200 g

6. large dog

5 kg or 50 kg

7. quarter

5 g or 500 g

8. adult male

7 kg or 70 kg

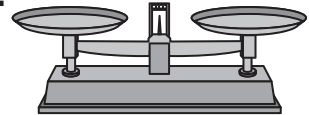
Choose the best tool to measure each.

9. the mass of a phone _____

a.



b.




10. the length of a crayon _____

11. the temperature _____


c.



d.



e.



12. the time for dinner _____

13. the capacity of a bowl _____

14. **Writing to Explain** Would you use grams or kilograms to find the mass of a letter? Explain.

15. **Reason** Which is the best estimate for the mass of a pair of sneakers?

A 1 kg

B 1 g

C 10 kg

D 10 g