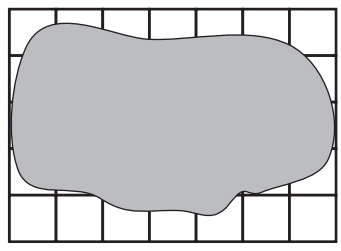


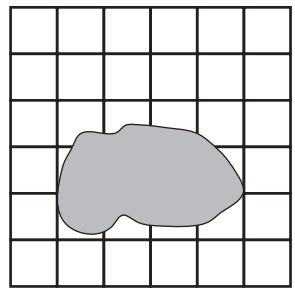
Problem Solving: Use Objects and Draw a Picture

Solve. Use objects or draw a picture.

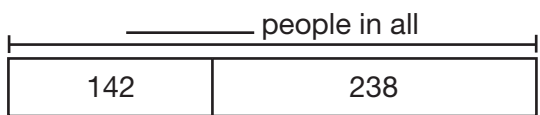
1. Ron painted part of a tiled section of his bathroom floor. The whole section was shaped like a rectangle. There were 35 square tiles in the section. How many tiles were in each row?



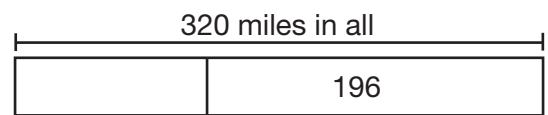
2. Some syrup spilled on a checkerboard-style table. The syrup covered some of the tiles. There were 36 squares on the table. How many of the squares had syrup on them?



3. Dress rehearsal of the play was attended by 142 people. Opening night was attended by 238 people. How many people saw the two shows in all?



4. Carol and Deanna drove 320 miles altogether this weekend. They drove 196 miles on Sunday. How many miles did they drive on Saturday?



5. **Write a Problem** Write and solve a real-world problem that you can solve by using objects or drawing a picture.
