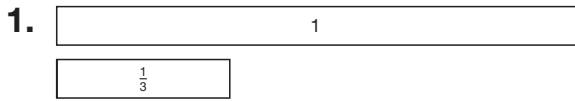
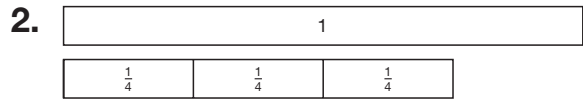
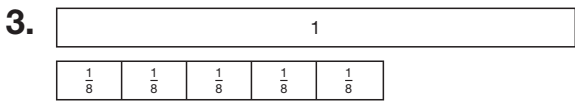


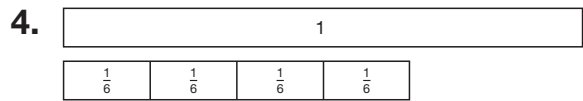
Fractions and Length

What fraction of the length of the 1 strip do the other strips show?

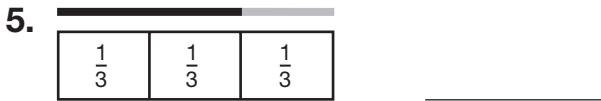








In 5 and 6, what fraction of each length of yarn is black?



7. **Writing to Explain** What is the purpose of using fraction strips and a 1 strip?

8. About $\frac{6}{8}$ of Earth's surface is covered by water. About what fraction of Earth's surface is not covered by water?

A $\frac{5}{8}$

B $\frac{1}{2}$

C $\frac{3}{8}$

D $\frac{2}{8}$