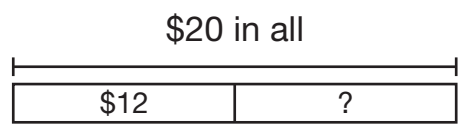
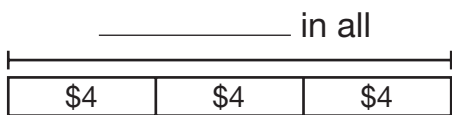


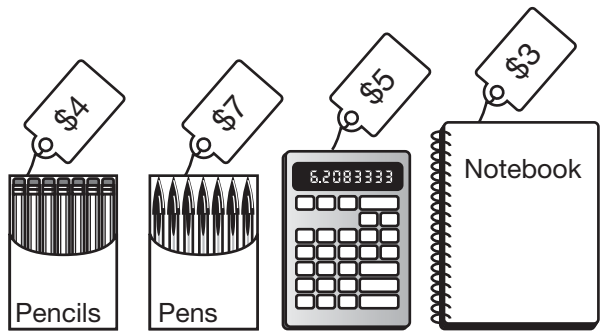
Problem Solving: Multiple-Step Problems

For 1 through 4, use the pictures.

1. Teri bought 3 boxes of pencils. She paid with a \$20 bill. How much change did she receive?

Tip First find the cost of the pencils.





2. Martin bought 3 boxes of pens and a calculator. How much money did he spend all together?

Tip First find the cost of the pens.

3. Joey bought 2 notebooks and 2 boxes of pencils. How much money did he spend all together?

4. Allie bought 3 notebooks and 2 boxes of pens. She paid with \$40. How much change did she receive?

5. **Write a Problem** Write a real-world problem involving multiple steps. Then solve your problem.

6. Bert has \$50 in his wallet. Then he buys 2 CDs for \$13 each. How much money does he have left?

- A** \$12 **B** \$24 **C** \$26 **D** \$37