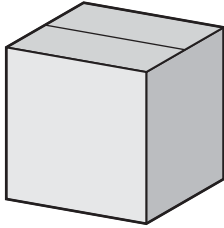


Name _____

Solids

For 1 through 3, tell which solid each object resembles.

1.



2.



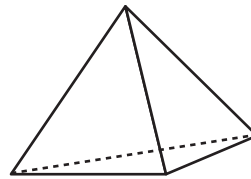
3.



For 4 and 5, complete each table by writing the number of vertices, edges, and faces in each solid shown at the right of each table.

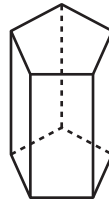
4.

Vertices	Edges	Faces



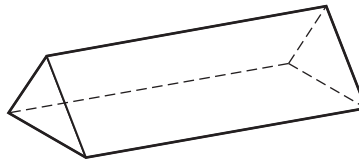
5.

Vertices	Edges	Faces



6. What is the name of the three-dimensional shape at the right?

- A Cone
- B Triangular prism
- C Pyramid
- D Rectangular prism



7. How many vertices does a cone have? Explain.
