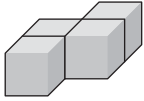


Name _____

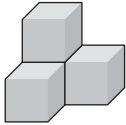
Views of Solids

For **1** and **2**, draw front, side, and top views of each stack of unit blocks.

1.

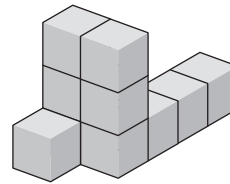


2.



3. In the figure for Exercise **2**, how many blocks are not visible?

4. In the figure at the right, how many unit blocks are being used?



- A 8
- B 9
- C 10
- D 11

5. A figure is made from 8 unit blocks. It is 3 units tall. What is the maximum length the figure could be? Explain.
